

The final exam is on  
**WEDNESDAY, MAY 15, 4:30pm –7:00pm.**  
Room: Budig 120.

The final exam will cover the following sections from the textbook.

- Chapter 2, Sections 2.2, 2.3, 2.4, 2.5, 2.6.
- Chapter 3, Sections 3.1, 3.2, 3.3, 3.4, 3.5, 3.6, 3.7.
- Chapter 4, Sections 4.1, 4.2, 4.3, 4.4, 4.5
- Chapter 5, Sections 5.1, 5.2, 5.4, 5.5
- Chapter 6, Sections 6.1, 6.3, 6.4, 6.5

These problems are intended to be used as part of a review for the final exam. There is also an assignment of review problems posted in WebAssign. They are not a substitute for studying the material of the sections and all the homework assignments.

**MULTIPLE CHOICE QUESTIONS: CIRCLE THE MOST CORRECT ANSWER. No partial credit.**

1. Evaluate:  $\lim_{x \rightarrow 3} \frac{x^2 - 9}{x + 3}$ .

- (A) 6            (B) 0            (C) 9            (D) Does not exist.  
(E) None of the above.

2. Evaluate:  $\lim_{x \rightarrow \infty} \frac{3x^3 - x + 9}{7x^3 - 1}$ .

- (A)  $\frac{7}{3}$             (B) 7            (C)  $\frac{3}{7}$             (D) Does not exist.  
(E) None of the above.

3. The equation of the tangent line to the curve  $y = \frac{x}{x+1}$  at  $(1, \frac{1}{2})$  is

(A)  $y = \frac{1}{4}(x-1) - \frac{1}{2}$       (B)  $y = \frac{1}{2}(x-1) - \frac{1}{4}$       (C)  $y = \frac{1}{2}(x-1) + \frac{1}{4}$

(D)  $y = \frac{1}{4}(x-1) + \frac{1}{2}$

(E) None of the above.

**Use the graph of the function  $f$  below to answer Problems 3, 4, 5, and 6**

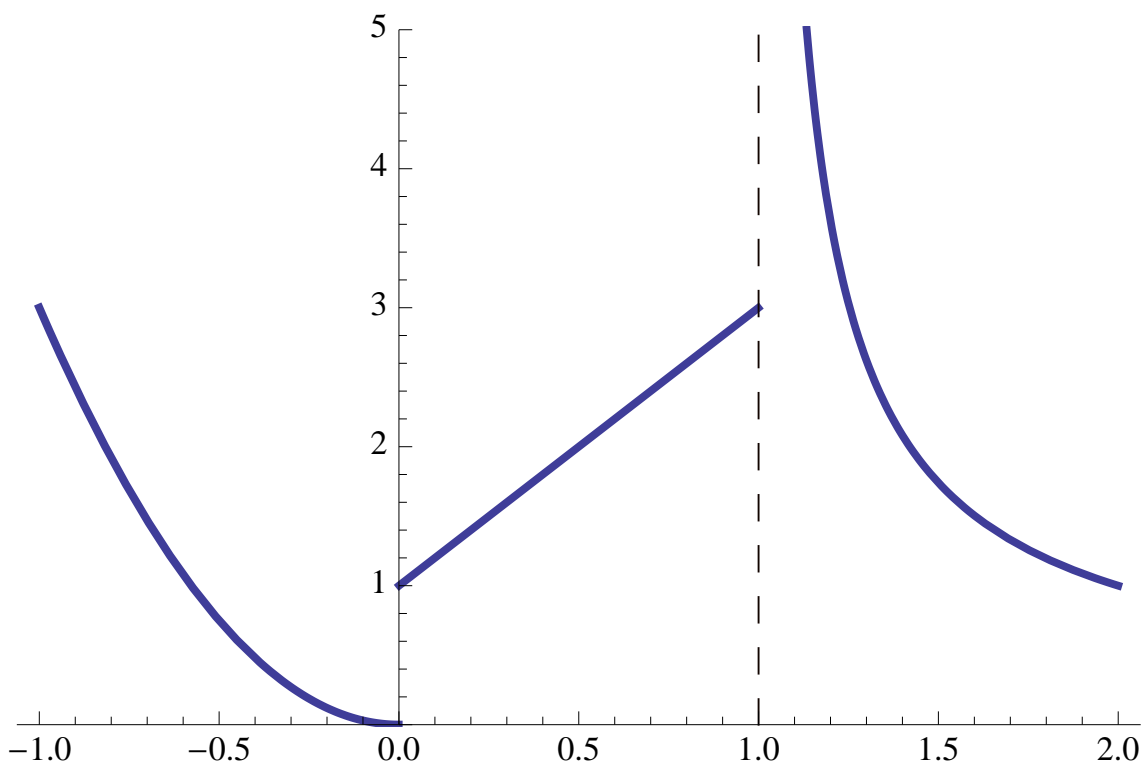


FIGURE 1

4.  $\lim_{x \rightarrow 1^+} f(x) =$

(A) 0      (B) 3      (C) 11      (D) Does not exist.

(E) None of the above.

5.  $\lim_{x \rightarrow 0^-} f(x) =$

(A) 1      (B) 0      (C) 2      (D) Does not exist.

(E) None of the above.

6. The function  $f$  is continuous at

(A)  $x = -0.5, 0, \text{ and } 1.5$  (B)  $x = -0.5, 1, \text{ and } 1.5$  (C)  $x = -0.5, 0, \text{ and } 0.5$  (D)  $x = -0.5, 0.5, \text{ and } 1.5$

(E) None of the above.

7. The function  $f$  is not continuous at

(A)  $x = -0.5$  (B)  $x = 0.5$  (C)  $x = 1$  (D)  $x = 1.5$

(E) None of the above.

8. The equation of the tangent line to the curve  $y = e^{\sqrt{x+1}}$  at  $(0, e)$  is

(A)  $y = 2x + 1$  (B)  $y = ex + \frac{e}{2}$  (C)  $y = \frac{x}{2} + 1$  (D)  $y = \frac{e}{2}x + e$

(E) None of the above.

9. Given the equation  $x^2 - 2x^2y + y^2 = 1$ . Find the derivative  $\frac{dy}{dx}$  by implicit differentiation.

(A)  $\frac{x - 2xy}{2y - x}$  (B)  $\frac{2y - x}{x - 2xy}$  (C)  $\frac{2y - x}{x - y}$  (D)  $-\frac{x - y}{2y - x}$

(E) None of the above.

**Answer Problems 10, 11, and 12 for the following information.**

A manufacturer has a monthly fixed cost of \$65,000 and a production cost of \$23 for each unit produced. The produce sells for \$30 per unit.

10. Find the cost function.

(A)  $C(x) = 65,000 - 23x$  (B)  $C(x) = 65,000 + 23x$

(C)  $C(x) = 65,000 - 30x$  (D)  $C(x) = 65,000 + 3x$

(E) None of the above.

11. Find the profit function  $P$ .

- (A)  $P(x) = 65,000 - 23x$       (B)  $P(x) = 65,000 + 23x$   
 (C)  $P(x) = 65,000 - 30x$       (D)  $P(x) = 65,000 + 3x$   
 (E) None of the above.

12. Find the marginal profit function.

- (A) 23      (B)  $23x$       (C) 3      (D)  $3x$   
 (E) None of the above.

13. The function  $f(x) = x^3 - 3x$  is increasing for

- (A) all real numbers      (B)  $x$  in  $(-1, 1)$       (C)  $x$  in  $(-\infty, 1)$       (D)  $x$  in  $(-\infty, 1)$  and  $x$  in  $(1, \infty)$   
 (E) None of the above.

14. The function  $f(x) = \frac{6x^2}{x^2 + 25}$  is decreasing for

- (A) all real numbers      (B)  $x$  in  $(0, \infty)$       (C)  $x$  in  $(-\infty, 0)$       (D)  $x$  in  $(-\infty, 0)$  and  $x$  in  $(0, \infty)$   
 (E) None of the above.

**Answer Problems 15, 16, and 17 for the following information.**

Let  $f(x) = x^4 - 18x^2 + 5$ .

15. The function  $f(x)$  is concave upward on the interval :

- (A)  $(-\infty, -2)$       (B)  $(2, \infty)$       (C)  $(-\infty, -\sqrt{3})$  and the interval  $(\sqrt{3}, \infty)$       (D)  $(-\sqrt{3}, \sqrt{3})$   
 (E) None of the above.

16. The function  $f(x)$  is concave downward on the interval:

- (A)  $(-\infty, -2)$       (B)  $(2, \infty)$       (C)  $(-\infty, -\sqrt{3})$  and the interval  $(\sqrt{3}, \infty)$       (D)  $(-\sqrt{3}, \sqrt{3})$   
(E) None of the above.

17. The inflection point(s) of  $f(x)$  is (are):

- (A)  $(-3, -76)$  and  $(3, -76)$       (B)  $(0, 0)$       (C)  $(-\sqrt{3}, -40)$  and  $(\sqrt{3}, -40)$   
(D)  $(-4, 0)$  and  $(4, 0)$       (E) No inflection points.

18. How many critical points does  $\frac{8x}{x^2+7}$  have?

- (A) None.      (B) 1      (C) 2      (D) 3  
(E) None of the above.

19. Consider  $y = x^4 - 1$ . The point  $(0, -1)$  is:

- (A) a relative minimum.      (B) a relative maximum.  
(C) an inflection point.      (D) an absolute minimum.  
(E) None of the above.

20. A firm has determined that its revenue  $R(x)$  (measured in thousands of dollars) from the sale of  $x$  units of its product is  $R(x) = 80 - \frac{200}{x+4} - 2x$ . The value of  $x$  that maximizes revenue is

- (A) 30 units.      (B) 8 units.      (C) 6 units.      (D) 10 units.      (E) 0 units.

21. An efficiency study conducted for a packing company showed that the number of cases packed by the average worker  $t$  hours after starting work at 8a.m. ( $t = 0$ ) is given by  $E(t) = -t^3 + 4t^2 + 12t$ ,  $0 \leq t \leq 4$ . At what time during the morning shift is the average worker at peak efficiency?

- (A) 10 : 30 a.m.      (B) 9 : 20 a.m.      (C) 11 : 00 a.m.  
 (D) 10 : 00 a.m.      (E) 10 : 15 a.m.

22. Which of the following statements is true for the function represented in the graph below in Figure 2?

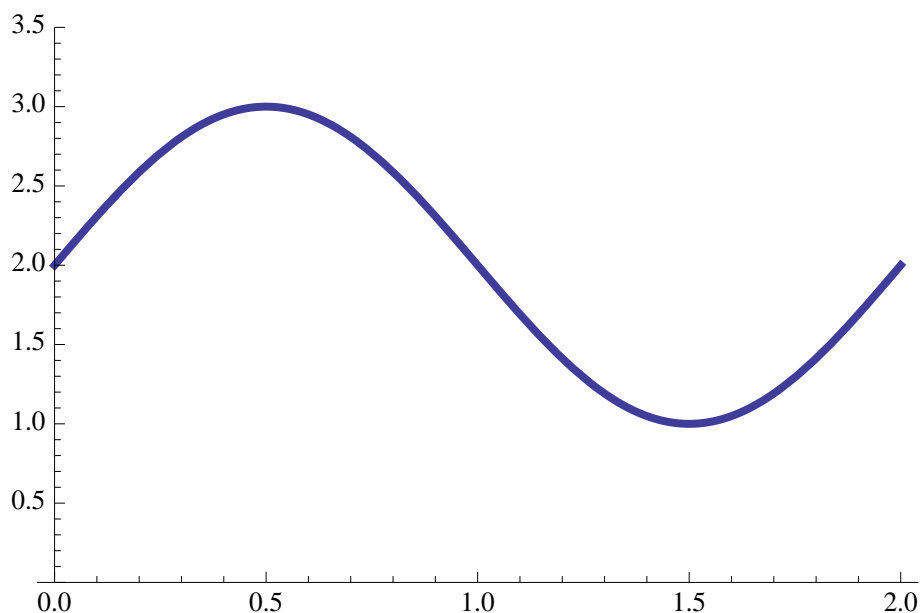


FIGURE 2

- (A)  $f' > 0$  on  $(0, 0.5)$ ,  $f'' > 0$  on  $(0, 1)$  and  $f'' < 0$  on  $(1, 2)$ .  
 (B)  $f' > 0$  on  $(0, 0.5)$ ,  $f'' < 0$  on  $(0, 1)$  and  $f'' > 0$  on  $(1, 2)$ .  
 (C)  $f' < 0$  on  $(0, 0.5)$ ,  $f'' > 0$  on  $(0, 1)$  and  $f'' < 0$  on  $(1, 2)$ .  
 (D)  $f' < 0$  on  $(0, 0.5)$ ,  $f'' < 0$  on  $(0, 1)$  and  $f'' > 0$  on  $(1, 2)$ .  
 (E) None of the above

23. Which of the following statements is true for the function represented in the graph below in Figure 3?

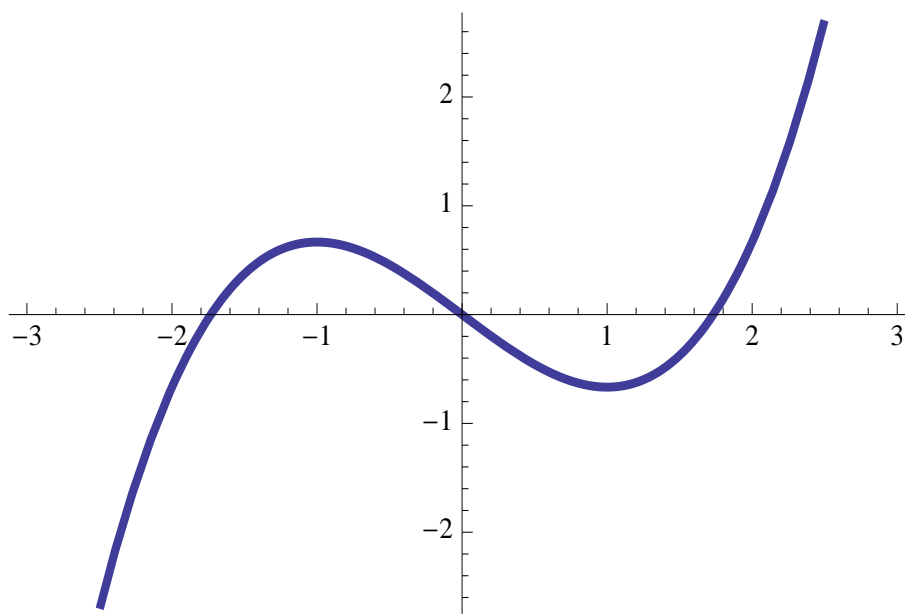


FIGURE 3

- (A)  $f$  has one inflection point and one local minimum in the interval  $(-3, 3)$ .  
 (B)  $f$  has one inflection point, one local maximum and one local minimum in the interval  $(-3, 3)$ .  
 (C)  $f$  has two inflection points and one local minimum in the interval  $(-3, 3)$ .  
 (D)  $f$  has two inflection points and one local maximum in the interval  $(-3, 3)$ .  
 (E) None of the above
24. Find the vertical asymptote(s) for the graph of  $f(x) = \frac{3x^2 - 17x - 1}{x^2 - x - 22}$ .
- (A)  $x = -1$  and  $x = 2$       (B)  $y = 3$       (C)  $y = -1$  and  $y = 2$       (D)  $x = 1$  and  $x = -2$   
 (E) None of the above.
25. Find the horizontal asymptote(s) for the graph of  $f(x) = \frac{3x^2 - 17x - 1}{x^2 - x - 22}$ .
- (A)  $x = -1$  and  $x = 2$       (B)  $y = 3$       (C)  $y = -1$  and  $y = 2$       (D)  $x = 1$  and  $x = -2$

(E) None of the above.

26. The derivative of the function  $\ln(e^x + x)$  is

(A)  $\frac{e^x + 1}{e^x + x}$       (B) 1      (C)  $(e^x + 1) \ln(e^x + x)$       (D)  $(e^x + x) \ln(e^x + x)$       (E)  $\frac{e^x + x}{e^x + 1}$

27. The derivative of the function  $e^{\sqrt{x+1}}$  is

(A)  $e^{\sqrt{x+1}}$       (B)  $\frac{e^{\sqrt{x+1}}}{\sqrt{x+1}}$       (C)  $\frac{e^{\sqrt{x+1}}}{2\sqrt{x+1}}$   
 (D)  $\frac{e^{\sqrt{x+1}}}{2(x+1)}$       (E)  $2\sqrt{x+1}e^{\sqrt{x+1}}$

**Answer Problems 28, 29, and 30 for the following information.**

A secretary's typing speed (in words per minute) after  $t$  years of experience can be modeled by the equation  $S(t) = 90 - 32e^{-0.69t}$ .

28. Find the typing speed at one year of experience. (Up to two decimal places.)

(A) 58      (B) 106      (C) 70      (D) 26      (E) 73.95

29. What is instantaneous rate of change of the typing speed at one year of experience? (Up to two decimal places.)

(A) 0.35      (B) 11.07      (C) 16.1      (D)  $-16.1$ ;      (E)  $-11.07$

30. How long will it take to reach a typing speed of 80 words per minute? Give your answer rounded to nearest year.

(A) 1 year.      (B) 2 years.      (C) 3 years.      (D) 4 years.      (E) 5 years.



**Answer Problems 31 and 32 for the following information.**

A company has determined that the value  $V$  (in dollars) of its investments is

$$V(t) = 20,000e^{0.02t},$$

where  $t$  is the number of years since the investments were made.

31. Find the value of the company's investments after five years. (Rounded up to dollars)

- (A) \$442.      (B) \$54,366.      (C) \$2,210.  
 (D) \$22,103.      (E) \$5,437.

32. The instantaneous rate of change of the value of the investments after 5 years since the investments were made is (rounded up to dollars per year).

- (A) 442 dollars/year.      (B) 54,366 dollars/year.      (C) 2,210 dollars/year.  
 (D) 22,103 dollars/year.      (E) 5,437 dollars/year.

**Answer Problems 33, 34, and 35 for the following information.**

In an experiment involving an unidentified virus, researchers have determined that the body temperature ( $B$ ) of a victim varies with respect to time ( $t$ ) and is approximated by

$$B(t) = \frac{10t}{t^2 + 1} + 98.6,$$

where  $B$  is measured in degrees Fahrenheit and  $t$  is measured in hours.

33. What is the value of the body temperature after 2 hours? (Rounded up to two decimal places.)

- (A)  $98.6^\circ F$       (B)  $103.6^\circ F$       (C)  $102.6^\circ F$       (D)  $103.3^\circ F$       (E)  $102.1^\circ F$

34. Determine the rate of change of body temperature with respect to time.

- (A)  $-10 \frac{t^2 + 1}{(t^2 - 1)^2}$       (B)  $-10 \frac{2t}{(t^2 + 1)^2}$       (C)  $-10 \frac{t^2 - 1}{t^2 + 1}$   
 (D)  $\frac{t^2 - 1}{(t^2 + 1)^2}$       (E)  $-10 \frac{t^2 - 1}{(t^2 + 1)^2}$

35. What is the average rate of change of the body temperature during the three hours after the victim was affected by the virus ?(Rounded up to two decimal place.)

- (A) 1 degrees/hour      (B) 2 degrees/hour      (C) 0.88 degrees/hour  
(D) 1.01 degrees/hour      (E) 2.01 degrees/hour

36. The area of the region under the graph of the function  $f(x) = x^3 + x$  on the interval  $[0, 1]$  is

- (A) 2      (B)  $\frac{7}{12}$       (C) 0      (D) 4      (E)  $\frac{3}{4}$

37. The area of the region under the graph of the function  $f(x) = e^x$  on the interval  $[0, 1]$  is

- (A) e      (B)  $e^2 - e$       (C) 0      (D) -1      (E)  $e - 1$

38. The indefinite integral  $\int \left(\frac{1}{x} + 2x\right) dx$  is

- (A)  $\ln|x| + 2x^2 + C$ .      (B)  $\ln|x| + \frac{1}{2}x^2 + C$ .      (C)  $e^x + x^2 + C$ .  
(D)  $\ln|x| + x^2 + C$ .      (E)  $e^x + x^3 + C$ .

39. The function  $f(x)$  which satisfies the initial value problem  $f'(x) = x^3 + x^2$ ;  $f(0) = 3$  is

- (A)  $\frac{x^4}{4} + \frac{x^3}{3}$       (B)  $\frac{x^4}{4} + \frac{x^3}{3} + 3$       (C)  $x^4 + \frac{x^3}{3} + 3$   
(D)  $\frac{x^4}{4} + x^3$       (E)  $\frac{x^4}{4} + \frac{x^3}{3} + 1$

40. The absolute maximum and absolute minimum of  $f(x) = x - \frac{9}{x}$  on  $[1, 5]$  are at the points

(A) (1, 10) and (5, 6.8)      (B) (0, 10) and (3, 6)

(C) (3, 6) and (5, 6.8)      (D) (5, 6.8) and (3, 6)

(E) None of the above